

1. Simplify

$$30 - 2 \cdot (2y + 1) = \underline{\hspace{4cm}}$$

$$30 - 2 \cdot (2y - 1) = \underline{\hspace{4cm}}$$

2. Fill in the missing numbers to complete the pattern:

5.40 6.00 6.60 7.30

3. Find all possible equivalent statements among the statements below:

- a. A is 40% of B.
- b. A is 4 times smaller than B.
- c. A is 25% of B.
- d. A is 2 times smaller than B.
- e. B is greater than A by 300%.
- f. B is 2.5 times greater than A.
- g. B is greater than A by 100%
- h. A is smaller than B by 75%.
- i. A is 50 % of B.
- j. B is greater than A by 150%

4. Solve the equation:

$$14 - \frac{1}{2\frac{1}{7}x} = 2$$

5. Compare:

$$|7 - 4| \square |7| - |4|$$

$$|3 - 7| \square |7| - |3|$$

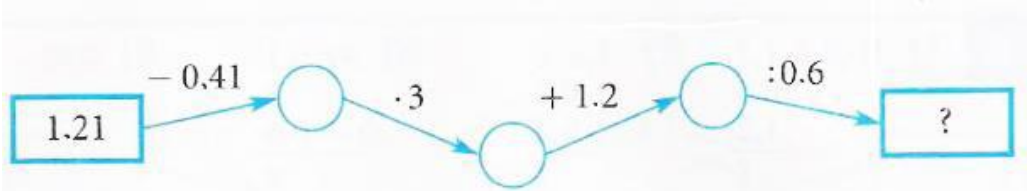
$$|-7 - 3| \square |7| + |3|$$

If $a < 0$ and $b > 0$



$$|a + b| \square |a| + |b|$$

$$|b * a| \square b * |a|$$

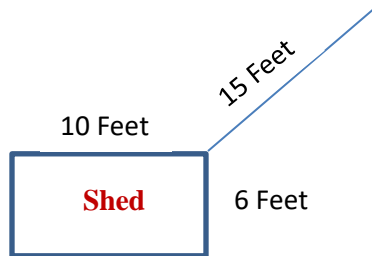
6. Find the missing numbers:



7. Which part of the rectangles below is shaded? What percent of the area is shaded in each?



8. A cow is tethered to the corner of a rectangular shed. If the length of the rope is 15 feet, and the shed has length 10 feet and width 6 feet. Draw the shape of the field that is accessible to the cow and calculate the lengths of rope remaining after the cow turns corners.



9. Draw the segment $AC = 6\text{cm}$. Mark the point B in such a way that

a) $\frac{AC}{BC} = 1$; б) $\frac{AC}{BC} < 1$; B) $\frac{AC}{BC} > 1$; r) $\frac{AC}{BC} = 2$.

10. There are singers and dancers in our class. $\frac{1}{5}$ of all singers also dance and $\frac{1}{4}$ of all dancers also sing. Are there more singers or dancers in our class?

11. Simplify the following fraction:

a)
$$\frac{2 - \frac{1}{\frac{1}{2} + \frac{1}{4}}}{2 + \frac{1}{\frac{1}{2} + \frac{1}{4}}}$$

12. I have 120 candies and I gave 35% of my candies to a friend. How many candies do I have now?

13. In a department store, there was a sale offering 25% off on everything. What did I pay for the dress, if its price before the sale was \$80? How much this dress would cost if an additional 30% discount could be applied?