

USEFUL RESOURCES

The updates, homework assignments, and useful links for APC can be found on SchoolNova's web page:
https://schoolnova.org/nova/classinfo?class_id=adv_phy_club&sem_id=ay2020
 The practical information about the club and contacts can be found on the same web page.

TODAY'S MEETING

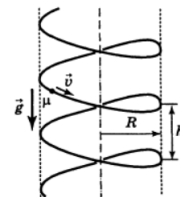
We continue preparing for the $F=ma$ exam. The new regular topic is energy conservation law; there are also some unfinished problems on friction force and momentum conservation.

F=MA PREPARATION

1. Solve $F = ma$ exam 2018 (version A) and time yourself. You can download exam problems here:
<https://www.aapt.org/physicsteam/2019/upload/Fma-2018-A.pdf>
 If you don't have time for the entire exam, at least look through the problems to choose the ones most interesting/unclear to you. We will discuss the suggested problems at the beginning of the next meeting.

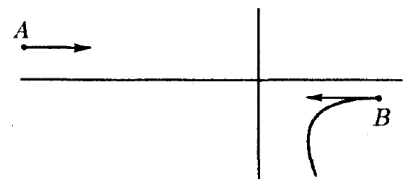
REMAINING FROM PREVIOUS HOMEWORKS

1. A long wire is shaped as a coil of radius R and pitch h . The axis of the coil is vertical. There is a bead sliding down along the coil. Friction coefficient between the bead and the coil is μ . Find the steady speed of the bead.



- *2. A coin lies on a very long inclined plane with angle α . Friction coefficient is $\mu = \tan \alpha$. The coin is hit and it starts to move with horizontal velocity v along the plane. Find velocity of the coin after a very long time.

3. Two charged particles have masses m and $2m$ and initial speeds $2v$ and v respectively. They start moving from points A and B towards each other, as shown on the figure. The particles only interact with each other. Knowing the trajectory of particle $2m$,



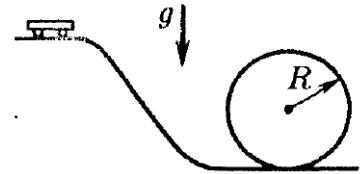
- *4. A tank with water with density ρ_0 rests on a frictionless table. Volume of water is V_0 . There is a bug with volume V and density ρ at the bottom of the tank. The bug starts to move with horizontal velocity v with respect to the tank. With what velocity will the tank move on the table? Neglect mass of the tank. Water level stays horizontal at all times.



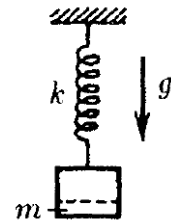
- *5. In a very dense fog lots of tiny water droplets "float" with negligible speed. If one of the droplets for some reasons gets a bit larger, it starts falling and absorbs the other droplets it meets on the way. Assuming this droplet stays spherical during the fall, it turns out that it falls with constant acceleration despite air resistance, which is proportional to the speed of the droplet squared and its' cross section area. Find the maximal possible acceleration of such a droplet.

NEW HOMEWORK

1. Two identical bodies are given the same initial velocity at the same angle to the horizon. One of the bodies moves freely while the other one moves without friction in a straight tube. Which of the bodies will reach greater height?
2. A cart goes down the smooth rails which are curved in a vertical loop of radius R . The cart starts moving from rest at height h above the lowest point and stays on the rails for the whole way. What is the minimal h such that it is possible?



3. A block is in equilibrium on a vertical spring with spring constant k . A part of this block of mass m is detached from it. Up to what height will the rest of the block go?



FOR THE NEXT MEETING

IMPORTANT: The next club's meeting is at 3:00pm, via Zoom, on Sunday, **January 23**.