

5


Double and half.

- a) What is half of 20? _____
- b) What is double of 6? _____
- c) What is half of 2? _____
- d) What is half of 1? _____
- e) what is double of 17? _____

6

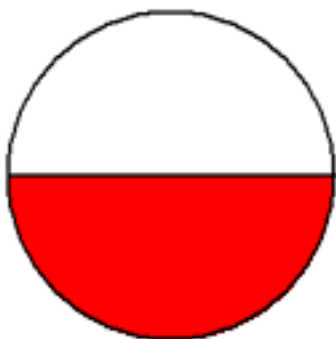
One-digit-one-line Long Multiplication. Remember about Place Value!

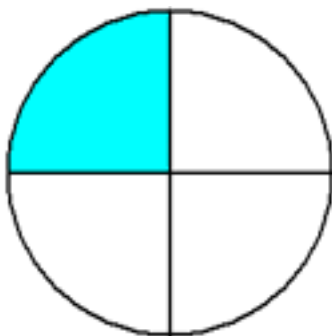
- a) $43 \times 22 =$
- b) $432 \times 222 =$
- c) $4321 \times 2222 =$

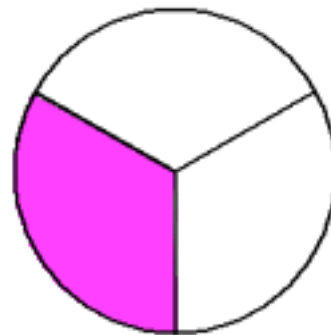


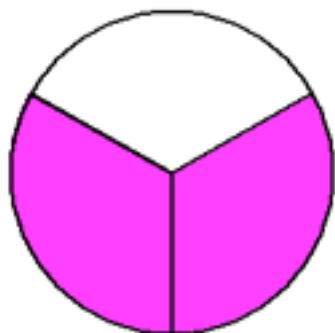
7.

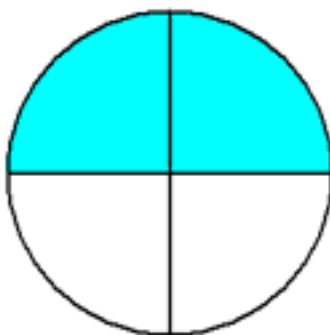
What fraction of each circle is shaded? Write the fractions vertically as two numbers and a line between them.

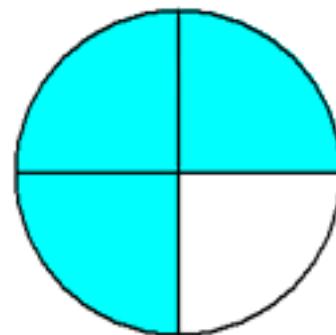


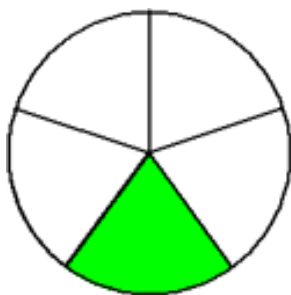


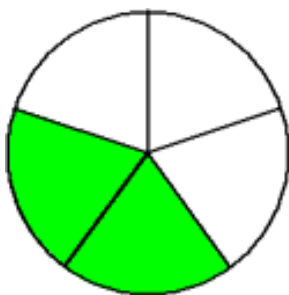


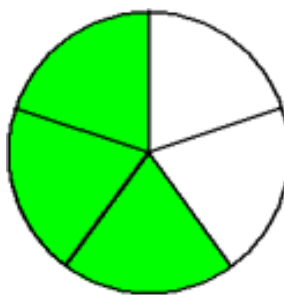


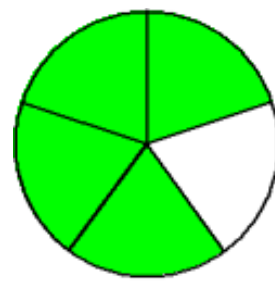












8.

Write down a number sentence:

- a) n is multiplied by six: _____
- b) one hundred twenty-two is added to a difference of a and b _____
- c) the product of b and c is subtracted from 10 _____
- d) subtract d from a sum of x and y _____

9.

Jonathan's dad has 6 pieces of ropes which have length of 7m, 9m, 42m, 58m, 126m and 133m. He only gives Jonathan 2 ropes at a time. Which 2 ropes does Jonathan need to get the total length of?

- a) 135m _____
- b) 175m _____
- c) 184m _____
- d) 49m _____
- e) 100m _____
- f) 168m _____

10

If there are 60 minutes in one hour, what part of the hour will be (simplify your fractions):

- a) 30 min _____
- b) 15 min _____
- c) 20 min _____
- d) 40 min _____
- e) 12 min _____
- f) 24 min _____

11

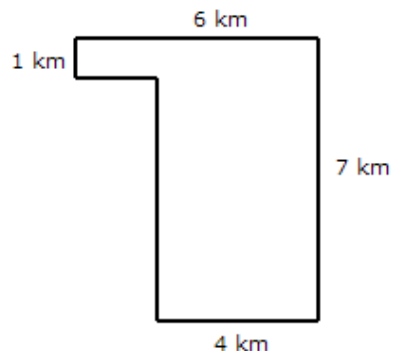
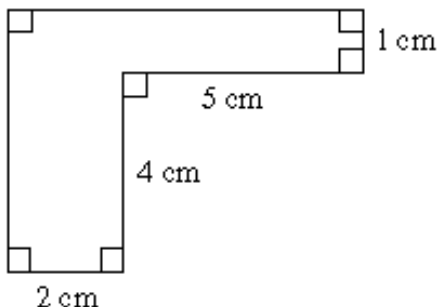
Compare, using $<$, $>$ or $=$. Think carefully about an order of operations:

- $8 \times 64 - 40 \dots 8 \times (64 - 40)$
- $100 \div 5 + 5 \dots 100 \div (5 + 5)$
- $20 + 50 \times 8 \dots (20 + 50) \times 8$
- $12 \times 43 + 51 \times 5 \dots 5 \times 51 + 43 \times 12$

12

Find an area and perimeter of composite shapes. Don't forget to write down units for both A and P.

a) A = _____ P = _____ b) A = _____ P = _____



13

Insert parentheses to make the equations correct:

$32 - 2 \times 6 + 3 = 183$

$32 - 2 \times 6 + 3 = 17$

$32 - 2 \times 6 + 3 = 23$

$32 - 2 \times 6 + 3 = 270$

14

a) Put all weights in order from the heaviest to the lightest:

2 kg, 1kg 900g, 250g, 25kg, 2,500g, 2kg 50g

b) Put all lengths in order from the smallest to largest:

3m 3dm, 30dm, 333cm, 3dm 3cm, 303cm

15

Use a compass and a ruler to plot:

- a) a circle with a center in a point **O** and the radius = 4cm - Circ (**O**, 4 cm)
- b) Circ (**O**, 5 cm)
- c) Circ (**W**, 4 cm)
- d) Circ (**R**, 3 cm)



Use a straight edge to plot straight lines WR, OR, and WO. Make sure these lines continue beyond the points O, R, and W.