



Math 3 Classwork 1

How much did you forget over the summer?

1

JUNE

a) $87 + 41 =$

b) $16 + 81 =$

c) $105 + 45 + 11 =$

d) $304 + 181 =$

<hr/>	<hr/>	<hr/>	<hr/>
-------	-------	-------	-------

2

a) $41 - 27 =$

b) $827 - 17 =$

c) $108 - 11 =$

d) $267 - 49 =$

<hr/>	<hr/>	<hr/>	<hr/>
-------	-------	-------	-------

3

Insert a number to make an equality correct:

a) $5 \times 4 = 2 \times \underline{\quad}$

b) $6 \times \underline{\quad} = 2 \times 9$

c) $10 \times 5 = 50 \times \underline{\quad}$

d) $25 \times 1 = 5 \times \underline{\quad}$

e) $12 \times \underline{\quad} = 6 \times 6$

f) $30 \times \underline{\quad} = 100 \times 3$

4

A bus route has 5 stops. The bus picked up 16 people at the first stop, 8 people at the second stop and another 11 people at the third stop. Some people got off the bus at the stop next to last. At the end of the route only 7 people were on the bus.

a) How many people were on the bus after the second stop? _____

b) How many people were on the bus after the third stop? _____

c) How many people got off the bus at the stop next to last? _____



JULY

5

Compare, using $<$, $>$ or $=$.

$6 \times 2 \square 6 \div 2$

$c \times 2 + c \square c \times 3$

$5 \times 2 \square 5 + 2$

$7 \times 3 \square 6 + 6 + 6$

$y \times 4 + y \times 2 \square y \times 5$

$q \times 2 \square q \div 2$

$6 \div 3 \square 6 \div 2$

$24 \div 6 \square 24 \div 4$

$t \div 2 \square t \div 3$

6

Without calculations, write all expressions in the descending order (from the largest to smallest):

$2 \times 17, \quad 17 \times 4, \quad 17 \times 7, \quad 8 \times 17, \quad 17 \times 5, \quad 3 \times 17, \quad 17 \times 1$







7

Without calculations, write all expressions in ascending order (from the smallest to largest):

$30 \div 1, \quad 30 \div 5, \quad 30 \div 3, \quad 30 \div 10, \quad 30 \div 6, \quad 30 \div 2, \quad 30 \div 30$

12

Connect the points by straight lines. Lines can intersect only at the given points. Use a ruler.

<p>A)</p> 	<p>B)</p> 	<p>C)</p> 
<p>D)</p> 	<p>E)</p> 	<p>F)</p> 

13

It takes two hours to cook two kilos of meat. How long will it take to cook one kilo of meat? _____

