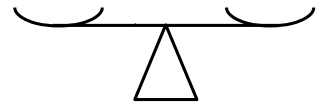


Solve in this handout

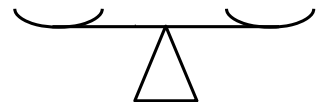
1. A bag may fit up to 12 cans of coke. How many bags are needed to carry 80 cans?

2. A fake coin weighs less than real ones. Using two cup balances find ...

a). ... the fake coin out of 3 in **only 1** weighing.



b). ... the fake coin out of 9 in **only 2** weighing.



3. Calculate:

$$2 \times (-6) = \qquad \qquad \qquad \frac{1}{3} \times 6 =$$

$$\frac{2}{3} \times 6 = \qquad \qquad \qquad 2 : (-6) =$$

$$\frac{1}{3} : (-6) = \qquad \qquad \qquad \frac{2}{3} : (-6) =$$

$$2 \times \frac{1}{6} = \qquad \qquad \qquad \frac{1}{3} \times \frac{1}{6} =$$

$$\frac{2}{3} \times \frac{1}{6} = \qquad \qquad \qquad 2 : \left(-\frac{1}{6}\right) =$$

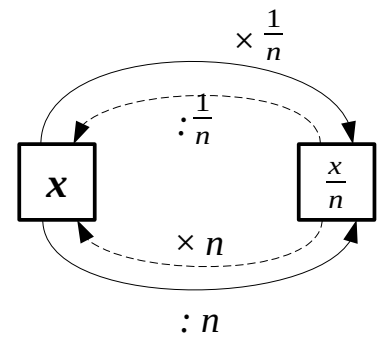
$$\frac{1}{3} : \left(-\frac{1}{6}\right) = \qquad \qquad \qquad \frac{2}{3} \times \left(-\frac{1}{6}\right) =$$

Solve in your notebook

4. Show that ...

$$\dots \text{ a).} \quad (2 - 4x) \times \frac{1}{2} + \left(\frac{1}{2}x + \frac{1}{2}\right) : \frac{1}{4} = 3$$

$$\dots \text{ b).} \quad \left(\frac{1}{4} - w\right) \cdot 2 + \left(w - \frac{1}{6}\right) \cdot 3 = w$$



5. Make Cartesian coordinates using $\frac{1}{2}$ cm (1 cell) as a unit. Mark point $D(3, 2)$. Plot $w = \text{Circ}(D, 5)$ ($r = 5$ units = $2\frac{1}{2}$ cm). Shade the cells that are completely inside the circle.

Put upper and lower limits on the area of the circle: $\underline{\hspace{2cm}} < S < \underline{\hspace{2cm}}$

6. Solve the equations: (Answers: a). $\{-\frac{2}{3}, 2\}$ b). $\{-10, 30\}$ c). \emptyset)

$$\text{a). } |3x - 2| = 4 \qquad \text{b). } \left|\frac{1}{5}x - 2\right| = 4 \qquad \text{c). } \left|\frac{1}{5}x - 2\right| = -4$$

7. Solve equations:

$$\text{a). } 8 - 12x = 4 \qquad \text{b). } 8 - 12 : x = 4 \qquad \text{c). } 12 : (8 - x) = 4$$

Answers: (a). $x = \frac{1}{3}$ b). $x = 3$ c). $x = 5$)