

MATH 6: HANDOUT 16
COORDINATE GEOMETRY III

FUNCTIONS

A function is a mathematical construct that takes an input and gives a unique value as an output. For example, consider the following function:

$$f(x) = 2x + 1$$

This function f can take any number, and it will give us an output based on its definition. For example, if we input 2 to our function we would get $f(2) = 2 \times 2 + 1 = 5$. We can repeat this for many numbers:

$$f(0) = 2 \times 0 + 1 = 1, \quad f(3.5) = 2 \times 3.5 + 1 = 8, \quad \text{etc...}$$

A function may be much more complex and it can have many rules as long as it gives us a single result for each input that we feed it with.

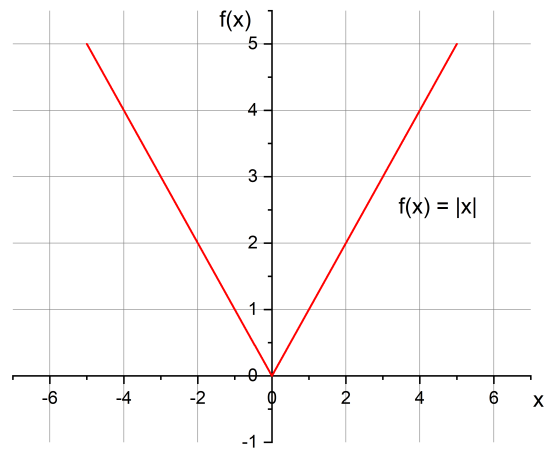
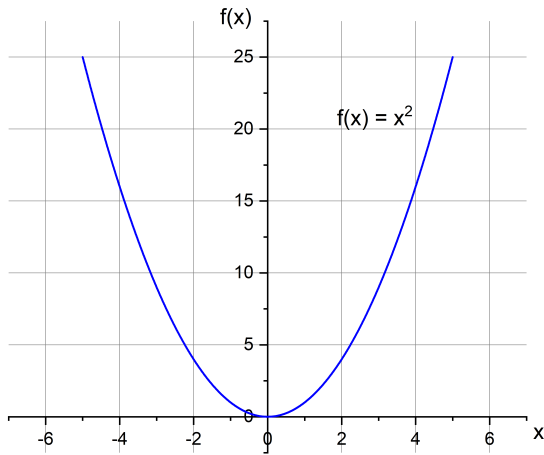
Graph of a function: A great way to understand the behavior of a function is by studying its graph. To do this, we will use the coordinate geometry that we had learned previously. If we decide to write

$$y = f(x),$$

then we can make a graph of this function in the same way as we made graphs for other objects in the previous classes. For example, the function which we defined earlier, $f(x) = 2x + 1$, would now be written as

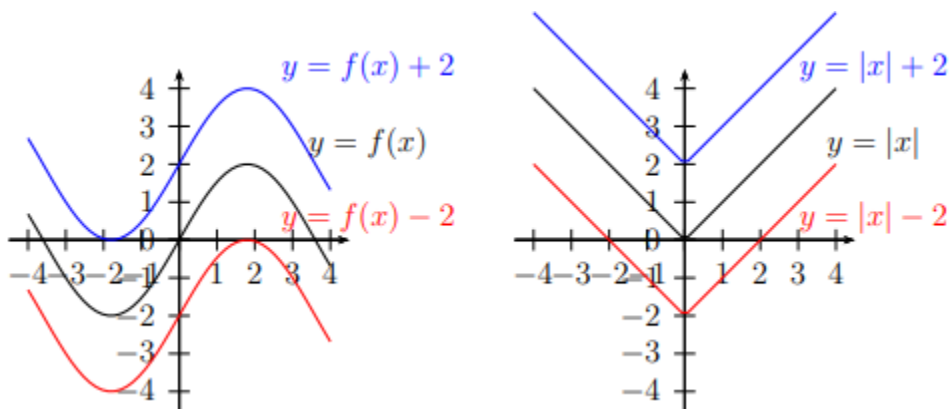
$$y = 2x + 1,$$

which we know corresponds to the equation of a line. Other interesting functions with nice graphs are $f(x) = x^2$, which is a parabola, and $f(x) = |x|$.

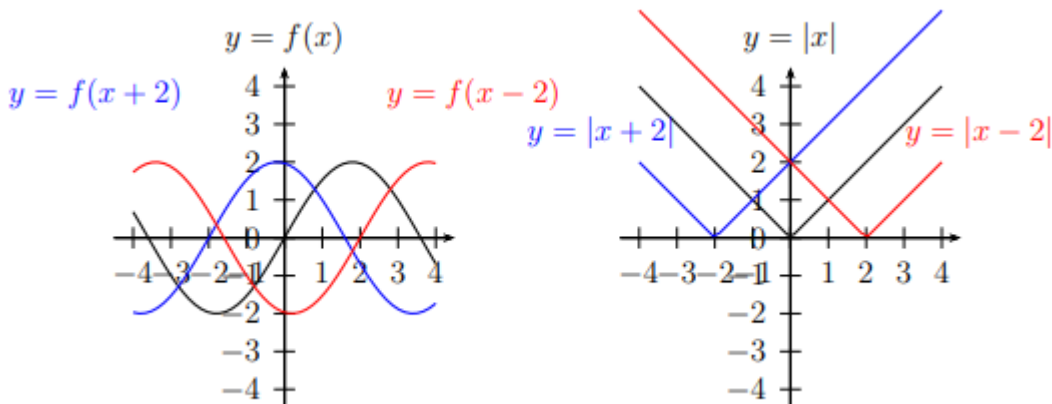


Transformations: Having these basic graphs, we can produce new graphs, by doing certain transformations of the equations. Here are two of them.

- **Vertical Translations:** Adding constant c to the right-hand side of equation shifts the graph by c units up (if c is positive; if c is negative, it shifts by $|c|$ down.)



- **Horizontal Translations:** Adding constant c to x shifts the graph by c units left if c is positive; if c is negative, it shifts by c right.



HOMWORK

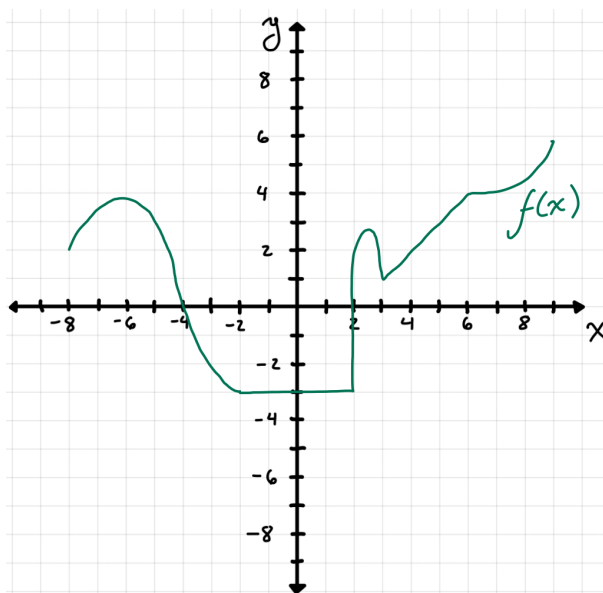
- (a) Sketch the graphs of functions $y = |x + 1|$ and $y = -x + 0.25$ in the same coordinate plane.
 (b) How many solutions for x does the following equation have:

$$|x + 1| = -x + 0.25$$

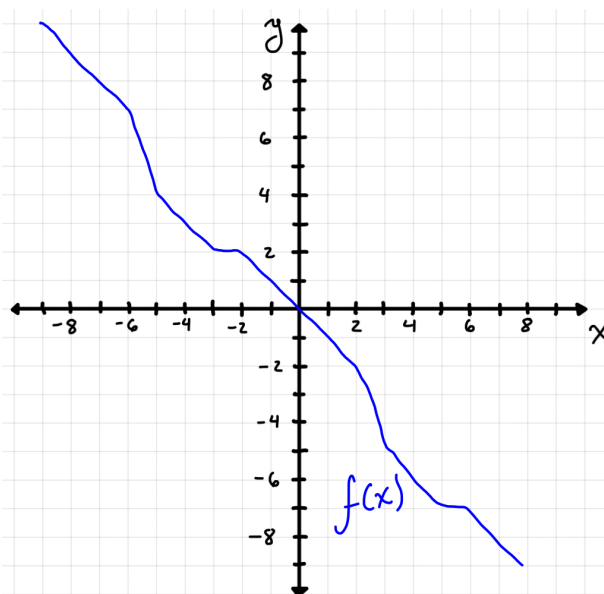
Note: you do not have to find the solutions, you just need to know how many solutions it will have.

- Graph a sketch of the following functions:
 - $y = |x| + 1$
 - $y = |x + 1|$
 - $y = |x - 5| + 1$
- Graph the function $f(x) = x^3 + x^2 - 2x$ on a graph that goes from -3 to 3 . Hint: First, tabulate the corresponding value of $f(x)$ every 0.5 steps and graph these points. Then, try to connect them continuously.
- Sketch the following function:

$$f(x) = \begin{cases} x^2 & \text{if } x \leq 0 \\ x & \text{if } x > 0 \end{cases}$$



5. The following coordinate plane shows the graph of a function $f(x)$. Draw the graph of function $g(x) = f(x) + 2$ on the same coordinate plane. **Note:** you do not need to know how function f is defined.
6. The following coordinate plane shows the graph of a function $f(x)$. Draw the graph of function $g(x) = f(x - 2)$ on the same coordinate plane. **Note:** you do not need to know how function f is defined.



- *7. One of the most important functions in trigonometry is the $\sin(x)$ function. Later on, you will learn how it is defined and how to use it. For now, use a calculator to tabulate some values of the function and try to sketch it from -10 to 10. How many times does it intersect the x axis in this range?
- *8. Sketch the following functions:
 (a) $y = |x| + |x + 1|$
 (b) $y = |x - 1| + |x + 1|$
 Hint: First, draw the graph for each of the terms being added. Then, try to add the graphs.