

MATH 6: HANDOUT 18
GEOMETRY II

1. PARALLEL AND PERPENDICULAR LINES

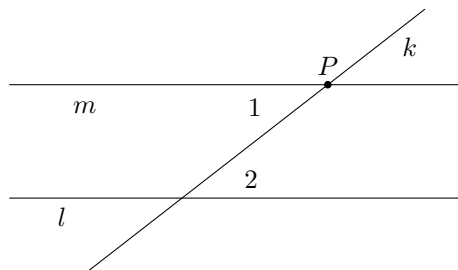
Theorem 6. Given a line l and point P not on l , there exists exactly one line m through P which is parallel to l .

Proof. **Existence.**

Let us draw a line k through P which intersects l . Now draw a line m through P such that alternate interior angles are equal: $m\angle 1 = m\angle 2$. Then, by Axiom 4 (alternate interior angles), we have $m \parallel l$.

Uniqueness.

To show that such a line is unique, let us assume that there are two different lines, m_1, m_2 through P both parallel to l . By Theorem 2, this would imply $m_1 \parallel m_2$. This gives a contradiction, because P is on both lines, but parallel lines cannot have any points in common, by definition!



□

Theorem 7. Given a line l and a point P not on l , there exists a unique line m through P which is perpendicular to l .

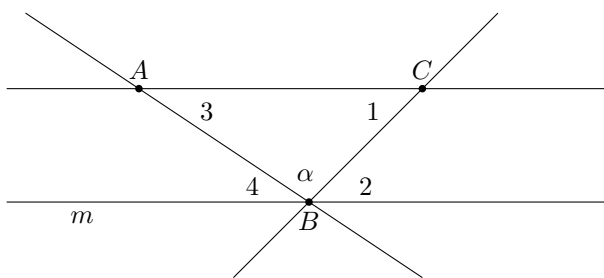
2. SUM OF ANGLES OF A TRIANGLE

Definition 1. A triangle is a figure consisting of three distinct points A, B, C (called vertices) and line segments $\overline{AB}, \overline{BC}, \overline{AC}$. We denote such a triangle by $\triangle ABC$.

Similarly, a quadrilateral is a figure consisting of 4 distinct points A, B, C, D and line segments $\overline{AB}, \overline{BC}, \overline{CD}, \overline{DA}$ such that these segments do not intersect except at A, B, C, D .

Theorem 8. The sum of measures of angles of a triangle is 180° .

Proof. Draw a line m through B parallel to \overleftrightarrow{AC} (possible by Theorem 6).



[By the way: α is a Greek letter, pronounced “alpha”; mathematicians commonly use Greek letters to denote angles]

Then $m\angle 2 = m\angle 1$ as alternate interior angles, and $m\angle 4 = m\angle 3$, also alternate interior angles. On the other hand, by Axiom 3 (angles add up), we have

$$m\angle 4 + m\angle \alpha + m\angle 2 = 180^\circ$$

Thus, $m\angle 3 + m\angle \alpha + m\angle 1 = 180^\circ$.

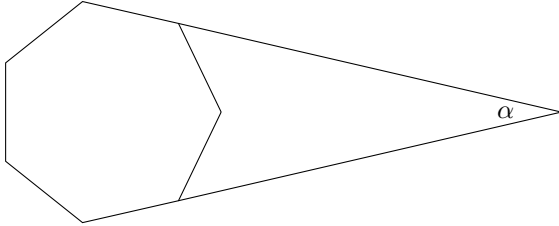
□

Theorem 9. For a triangle $\triangle ABC$, let D be a point on continuation of side AC , so that C is between A and D . Then $m\angle BCD = m\angle A + m\angle B$. (Such an angle is called the exterior angle of triangle ABC .)

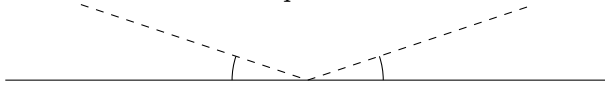
Theorem 10. Sum of angles of a quadrilateral is equal to 360° .

HOMEWORK

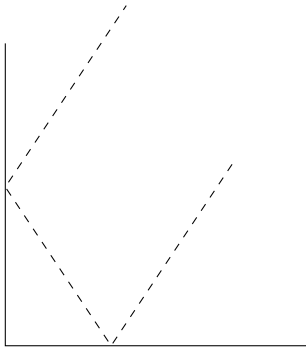
1. Prove Theorem 7.
2. Prove Theorem 9.
3. Prove Theorem 10
4. Deduce a formula for the sum of angles in a polygon with n vertices.
5. In the figure below, all angles of the 7-gon are equal. What is angle α ?



6. Show that if, in a quadrilateral $ABCD$, diagonally opposite angles are equal ($m\angle A = m\angle C, m\angle B = m\angle D$), then opposite sides are parallel. [Hint: show first that $m\angle A + m\angle B = 180^\circ$.]
7. The reflection law states that the angles formed by the incoming light ray and the reflected one with the surface of the mirror are equal: $m\angle 1 = m\angle 2$



Using this law, show that a corner made of two perpendicular mirrors will reflect any light ray exactly back: the reflected ray is parallel to the incoming one:



This property – or rather, similar property of corners in 3-D – is widely used: reflecting road signs (including stop signs), tail lights of a car, reflecting strips on clothing are all constructed out of many small reflecting corners so that they reflect the light of a car headlamp exactly back to the car.